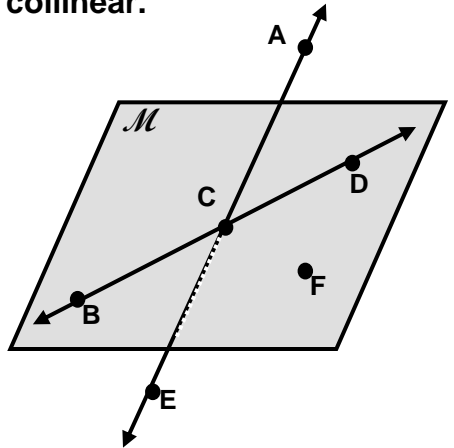


NAME _____ DATE _____ PER. _____

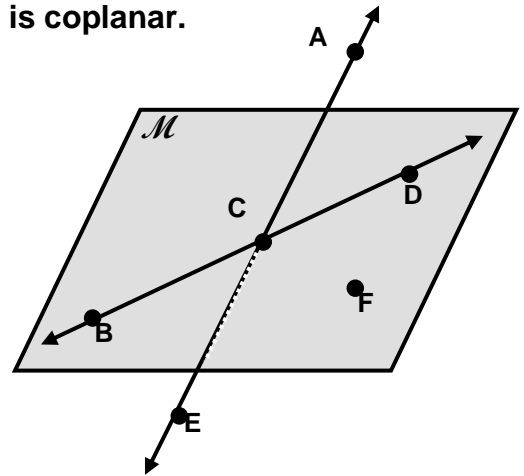
MORE POINTS, LINES, & PLANES

Using the figure at right, determine if each set of points is collinear.



1. A, D, E	Y or N
2. B, C, D	Y or N
3. B, C, F	Y or N
4. A, E, C	Y or N
5. F, B, D	Y or N

Using the figure at right, determine if each set of points is coplanar.



1. A, D, E	Y or N
2. B, C, D	Y or N
3. B, C, F	Y or N
4. A, B, C	Y or N
5. F, B, E	Y or N

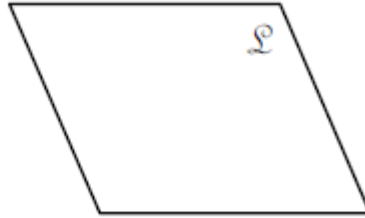
<p>↔ Draw MK.</p>	<p>— Draw GT.</p>	<p>Draw a pair opposite rays.</p>
-----------------------	-----------------------	-----------------------------------

Name the following using symbols. Write your answers at the bottom of the page.

1.



2.



3.



4.

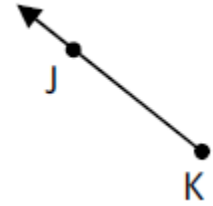


T

5.



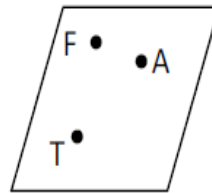
6.




7.



8.



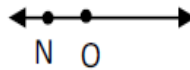
9.



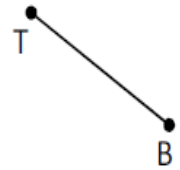
10.



11.



12.



1. _____

7. _____

2. _____

8. _____

3. _____

9. _____

4. _____

10. _____

5. _____

11. _____

6. _____

12. _____